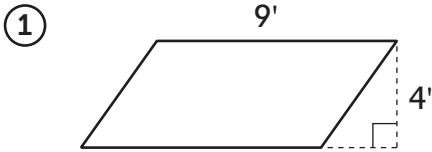


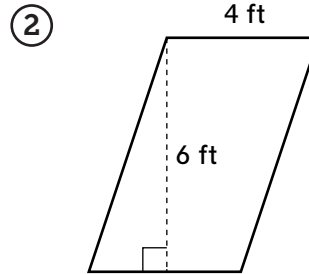
Finding the Areas of Parallelograms



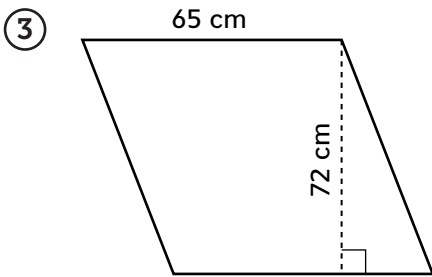
Find the area of each parallelogram. Show your work.



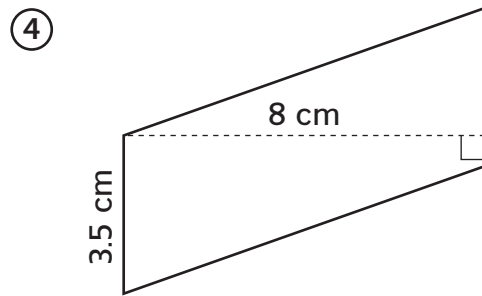
Area: _____



Area: _____




Area: _____



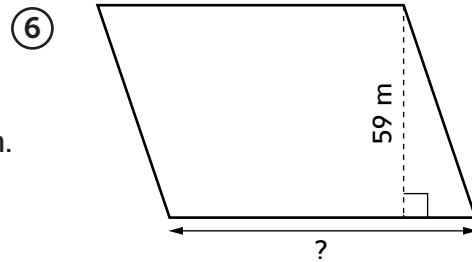
Area: _____

Try This The area of each parallelogram is given. Find the length of each base.



Area: 26 square inches

Base: _____



Area: 5,015 square meters

Base: _____

Practice Evaluate.

⑦ 20% of 45 _____

⑧ 45% of 60 _____

⑨ 83% of 110 _____