

Areas of Complex Shapes

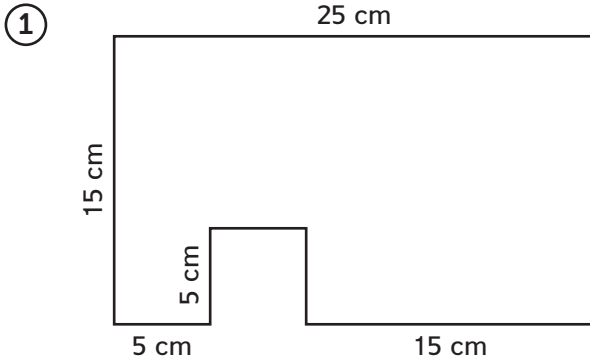
Home Link 5-4

NAME _____

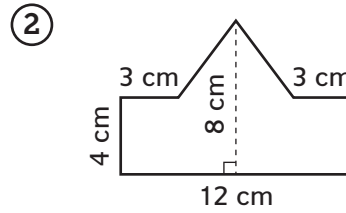
DATE _____

TIME _____

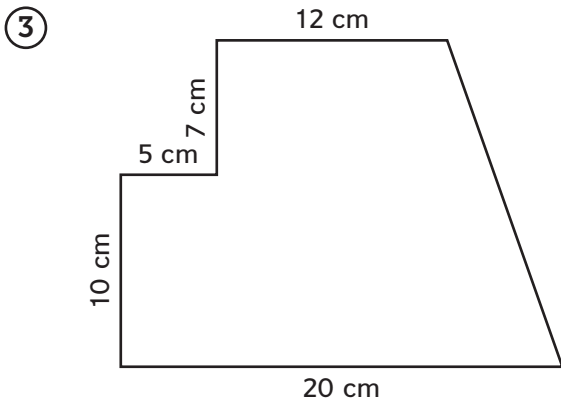
In Problems 1–4, decompose the shapes into polygons for which area formulas can be used. Label the areas. Find the total area for each shape. Use appropriate units.



Area: _____

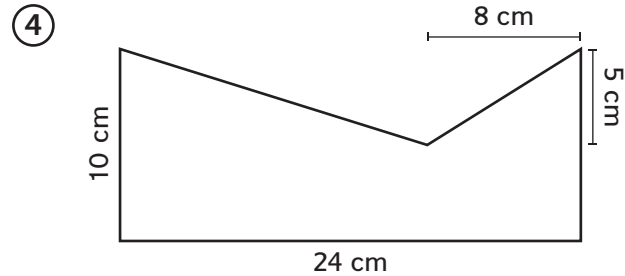


Area: _____



Area: _____

Try This



Area: _____

Practice Calculate.

⑤ $12 - 8.25 =$ _____

⑥ _____ $= 9.03 + 0.7 + 18$

⑦ $125.29 - 16.7 =$ _____

⑧ _____ $= 0.01 + 0.99$