

Extended Division Facts

Lesson 6-1

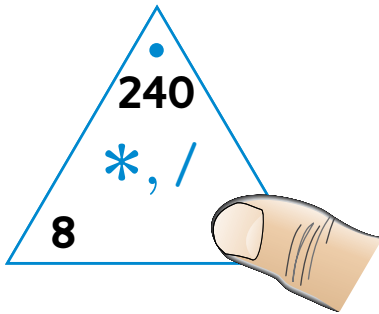
DATE

TIME



Write a basic division fact and extended division fact for each Fact Triangle.

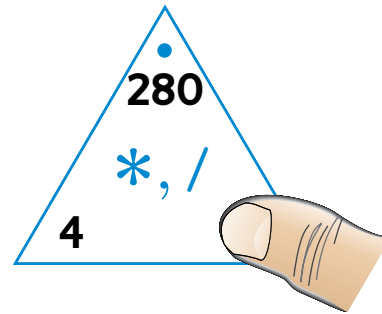
1



Basic fact: $24 \div 8 =$ _____

Extended fact: $240 \div 8 =$ _____

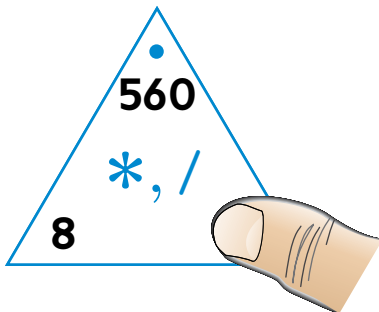
2



Basic fact: _____

Extended fact: _____

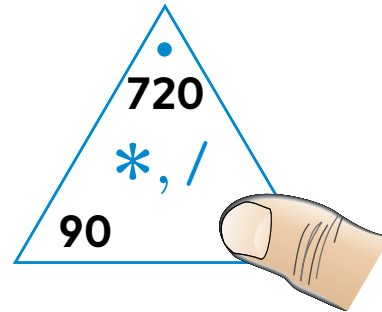
3



Basic fact: _____

Extended fact: _____

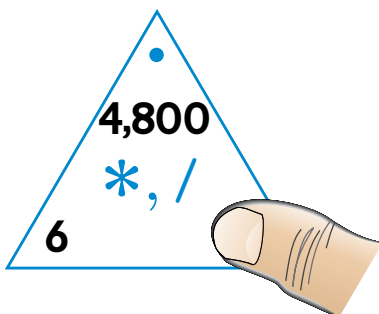
4



Basic fact: $72 \div 9 =$ _____

Extended fact: $720 \div 90 =$ _____

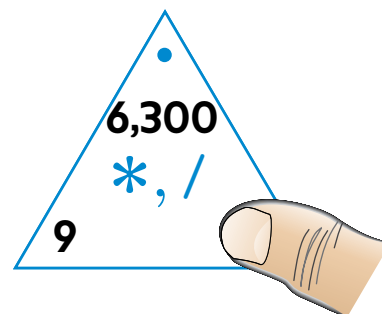
5



Basic fact: _____

Extended fact: _____

6



Basic fact: _____

Extended fact: _____

7

What strategy did you use to solve Problem 5?
