

# Drawing Angles

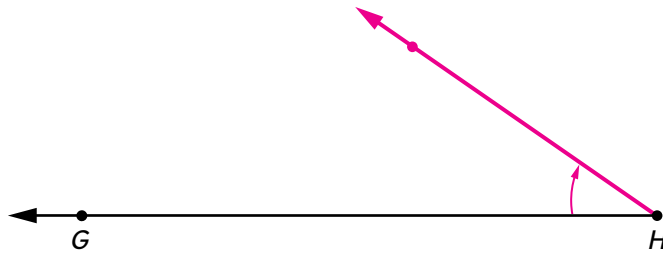
## Lesson 6-10

DATE

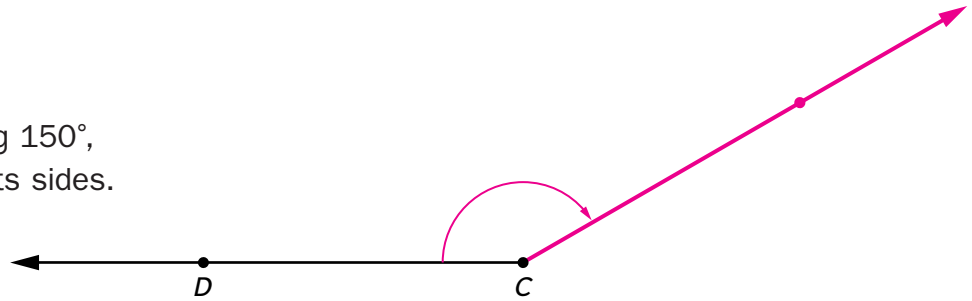
TIME

SRB  
208-210

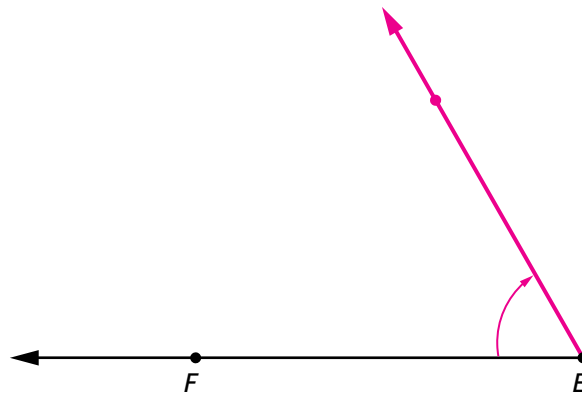
- 1 Draw an angle measuring  $35^\circ$ , using ray  $HG$  as one of its sides.



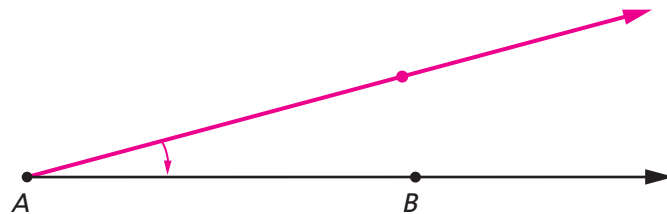
- 2 Draw an angle measuring  $150^\circ$ , using ray  $CD$  as one of its sides.



- 3 Draw an angle measuring  $60^\circ$ , using ray  $EF$  as one of its sides.



- 4 Draw an angle measuring  $15^\circ$ , using ray  $AB$  as one of its sides.



### Try This

- 5 Draw an angle measuring  $330^\circ$ , using ray  $IJ$  as one of its sides.

