

# Finding Angle Measures

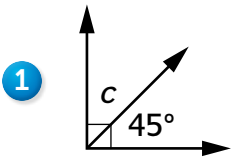
## Lesson 6-11

DATE \_\_\_\_\_

TIME \_\_\_\_\_

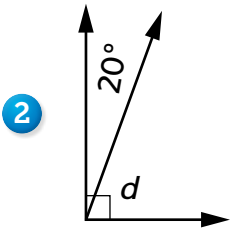


Find the unknown angle measures in Problems 1–5. Do *not* use a protractor.



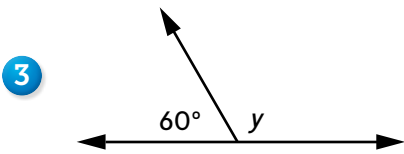
Equation with unknown: \_\_\_\_\_

Answer: \_\_\_\_\_



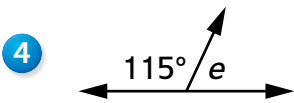
Equation with unknown: \_\_\_\_\_

Answer: \_\_\_\_\_



Equation with unknown: \_\_\_\_\_

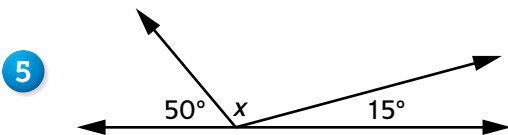
Answer: \_\_\_\_\_



Equation with unknown: \_\_\_\_\_

Answer: \_\_\_\_\_

### Try This



Equation with unknown: \_\_\_\_\_

Answer: \_\_\_\_\_