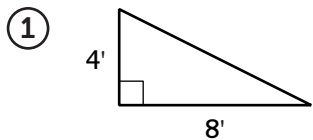


Triangle Area

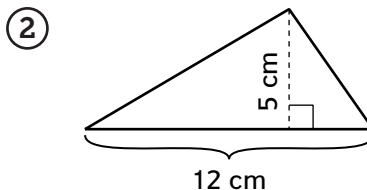


Find the area of each triangle. Remember: $A = \frac{1}{2}bh$.



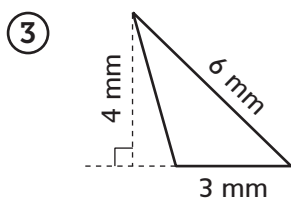
Number model: $\frac{1}{2} * (4 * 8) = 16$

Area = 16 ft²



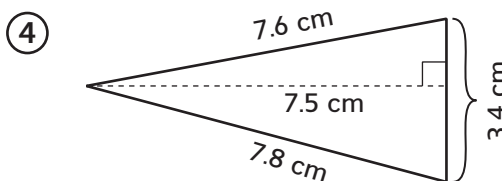
Number model: $\frac{1}{2} * (12 * 5) = 30$

Area = 30 cm²



Number model: $\frac{1}{2} * (3 * 4) = 6$

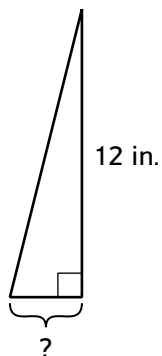
Area = 6 mm²



Number model: $\frac{1}{2} * (3.4 * 7.5) = 12.75$

Area = 12.75 cm²

⑤ Find the length of the base.

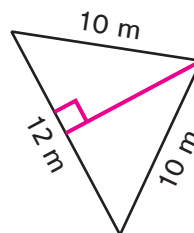


Area = 18 in.²

Base = 3 in.

Try This

⑥ Draw a height for the triangle. Find the length of the height.



Area = 48 m²

Height = 8 m

Practice

Compute.

⑦ $|-7| = \underline{7}$

⑧ $|4| = \underline{4}$

⑨ $\underline{3} = |-3|$